

The 10 times-table

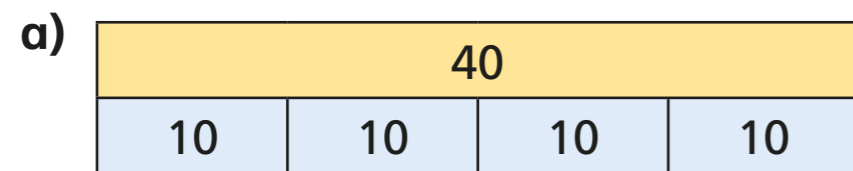
1 How many cookies are there?



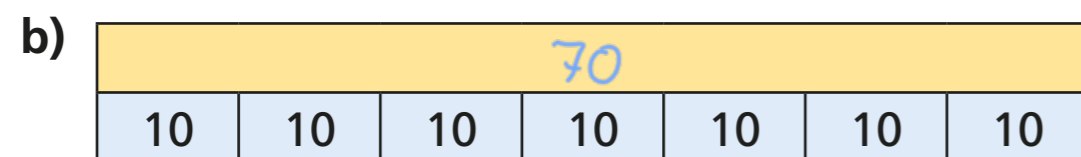
$$\boxed{6} \times 10 = \boxed{60}$$

There are $\boxed{60}$ cookies.

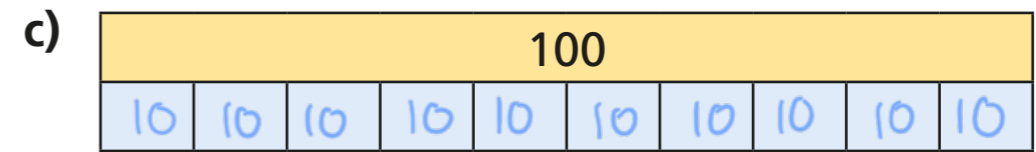
2 Complete the multiplication fact to match the bar model.



$$\boxed{4} \times \boxed{10} = \boxed{40}$$

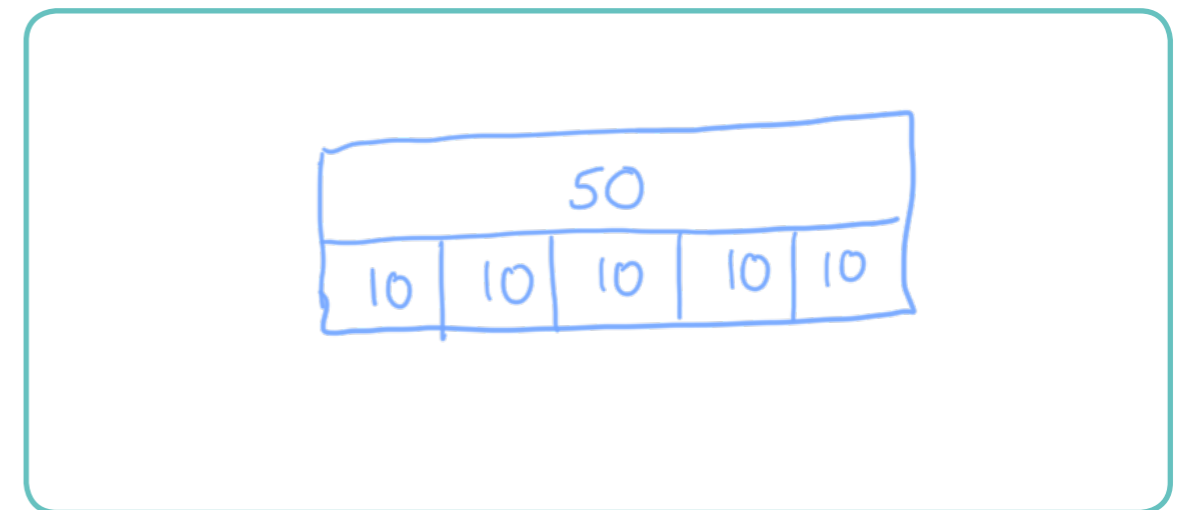


$$\boxed{7} \times \boxed{10} = \boxed{70}$$



$$\boxed{10} \times \boxed{10} = \boxed{100}$$

3 Draw a bar model to represent 5×10



4 a) Complete the number line.



b) Which times-table does the number line show?

Tick your answer.

10 times-table 5 times-table 1 times-table

How do you know?



5 Complete the number sentences.

a) $2 \times 10 = \boxed{20}$

f) $\boxed{100} = 10 \times 10$

b) $\boxed{70} = 7 \times 10$

g) $10 \times \boxed{1} = 10$

c) $10 \times 4 = \boxed{40}$

h) $10 \times 0 = \boxed{0}$

d) $10 \times \boxed{11} = 110$

i) $30 = 10 \times \boxed{3}$

e) $80 = \boxed{8} \times 10$

j) $\boxed{9} \times 10 = 90$

6 Eva is 7 years old.


Her gran is 10 times older.

How old is Eva's gran?

Eva's gran is $\boxed{70}$ years old.

7 Four children each have some money.

Teddy has this money.



Dora


I have twice
as much money
as Teddy.

I have five times
as much money
as Teddy.



Jack

I have ten times
as much money
as Dora.



Rosie

How much money do they each have?

Teddy has $\boxed{4}$ p

Dora has $\boxed{8}$ p

Jack has $\boxed{20}$ p

Rosie has $\boxed{80}$ p

